

|                              |                     |                                |
|------------------------------|---------------------|--------------------------------|
| <b>Time: 40 Minutes</b>      | <b>Paper Math 2</b> | <b>Total Marks: 25</b>         |
| 3rd Month, 4th Week, 6th Day |                     | <b>Syllabus: Revision Test</b> |

**Q.1. Choose the correct option and fill in the blanks. (5)**

درست جواب کا انتخاب کریں اور خالی جگہ پُر کریں۔

(i) One quarter is written as \_\_\_\_\_ دن کو اڑھ کو اس طرح لکھتے ہیں۔

|                   |                   |                   |                   |
|-------------------|-------------------|-------------------|-------------------|
| (a) $\frac{1}{2}$ | (b) $\frac{1}{3}$ | (c) $\frac{1}{4}$ | (d) $\frac{1}{5}$ |
|-------------------|-------------------|-------------------|-------------------|

(ii) Equal part have the same shape and the same \_\_\_\_\_

برابر کے حصے شکل اور \_\_\_\_\_ میں ایک جیسے ہوتے ہیں۔

|     |     |     |     |
|-----|-----|-----|-----|
| (a) | (b) | (c) | (d) |
|-----|-----|-----|-----|

(iii) \_\_\_\_\_ called four-fifths. کو فور ففٹھ کہا جاتا ہے۔

|                   |                   |                   |                   |
|-------------------|-------------------|-------------------|-------------------|
| (a) $\frac{4}{5}$ | (b) $\frac{5}{4}$ | (c) $\frac{4}{6}$ | (d) $\frac{5}{6}$ |
|-------------------|-------------------|-------------------|-------------------|

(iv)  $\frac{\text{Number of coloured part}}{\text{Total number of equal part}}$

رنگ دار حصوں کی تعداد  
کل برابر حصوں کی تعداد


|                              |   |
|------------------------------|---|
| (a) One half<br>دن ہاف       | (b) One third<br>دن تھرڈ                                |
| (c) One quarter<br>دن کو اڑھ | (d) Fraction of coloured parts<br>رنگ دار حصوں کی فرکشن |

**Q.2. What do you know about one-half, one-third and one quarter.**

آپ دن ہاف، دن تھرڈ اور دن کو اڑھ کے متعلق کیا جانتے ہیں؟

**Q.3. Match the coloured shape with the correct fraction.**


رنگ دار اشکال کو درست فرکشن سے ملائیں۔



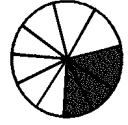
$$\frac{3}{4}$$



$$\frac{1}{5}$$



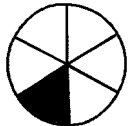
$$\frac{2}{7}$$



$$\frac{8}{9}$$



$$\frac{5}{6}$$

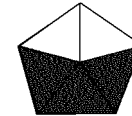


$$\frac{7}{10}$$

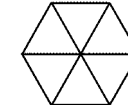
**Q.4. Colour the shape for the given fraction. (9)**

درج ذیل اشکال کو دی گئی فرکشن کے مطابق رنگ کریں۔

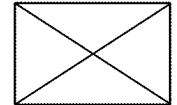
$$\frac{3}{5}$$



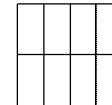
$$\frac{5}{6}$$



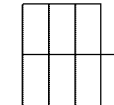
$$\frac{3}{4}$$



$$\frac{7}{8}$$




$$\frac{2}{7}$$



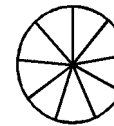
$$\frac{5}{10}$$



$$\frac{6}{10}$$



$$\frac{7}{9}$$



$$\frac{9}{10}$$

